

Learning with Landy

Fun Maths



Counting backwards in tens



160	20	30	50	10	90	70		
150		40		20		40		
140	40	50	60	70	30	60		
130		60		80		80		
30	140	120	110	100	70	90	20	100
50		50		90		100		40
10	20	70	20	80	100	110	20	80
80		80		70		120		
50	110	60	80	60	70	130		
90		100		50		10		
20	50	90	10	40	30	20		




Help Dan drive to Jack's house!

Work your way backwards from 150 counting in tens.

Learning with Landy






Fun Maths




Write one less and two more
in the circles below:

One less

Two more










Learning with Landy



Write three less and four more
in the circles below:

Three less

Four more




Learning with Landy

Maths Fun



More Counting:


Can you finish
drawing twelve
nails, seven
hammers and five
screw drivers?
Now add them
up: Total





Number Sentences

- 1) Jack hammered in 7 nails every 9 minutes. How many nails did he hammer in 27 minutes?



- 2) Landy and Fender each have 4 wheels, two wing mirrors, a bonnet, a bumper and two number plates. How many items do they have altogether?




- 3) Jack has two goats and two pigs. They each have four legs. How many legs is that altogether?



- 4) Pickup has the letters HG CVP on his number plate. Can you put these letters in alphabetical order?

abcdefghijklmnopqrstuvwxyz

Number Sentences



- 5) James brings Jack 6 bales of hay every month.
How many bales does Jack have in a year?



- 6) If Jack throws Molly her ball 12 times every week, how many times does he throw it in 11 weeks?



- 7) Jack and Dan each drink two cups of tea every three hours. How many cups do they drink altogether in 9 hours?



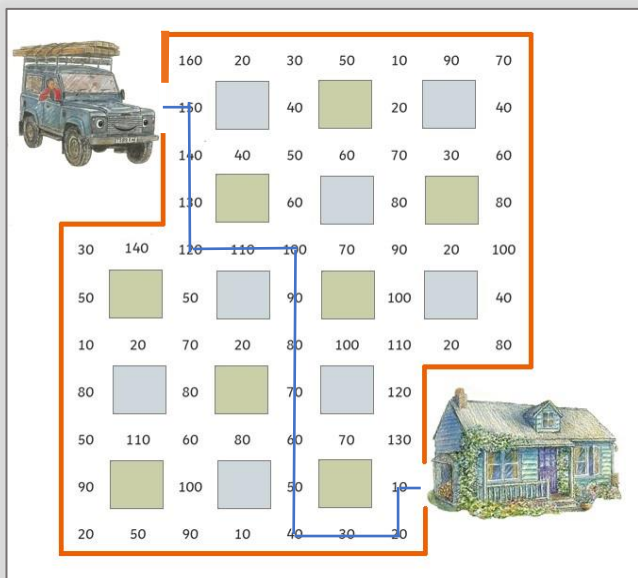
- 8) Dan has 138 screws. He and Jack use half of them.
How many does he have left?

- 9) Jack buys 14 little cakes from Katy's café. He gives 3 to Florrie and he and Dan eat 4 each. How many are left?





Answers



one less

two more



2

5



5

8



8

11



11

14



7

10



9

12

three less

four more



12

19



10

17



5

12



16

23



3

10



2

9

Adding up the items: 24

Counting in fives:

5 10 15 20 25 30 35 40
45 50 55 60 65 70 75
80 85 90 95 100 105 110

Number Sentences:

1) $27 \div 9 = 3 \times 7 = 21$

2) 20 items

3) 16 legs

4) CGHPV

5) $6 \times 12 = 72$

6) $12 \times 11 = 132$

7) $9 \div 3 = 3 \times 4 = 12$

8) $138 \div 2 = 69$

9) $14 - 11 = 3$